

Mathematics Paper 1

FORM 4
5 NOVEMBER 2019

TIME: 3 hours

TOTAL: 150 marks

Name and Surname:

**PLEASE READ THE FOLLOWING INSTRUCTIONS CAREFULLY
BEFORE ANSWERING THE QUESTIONS.**

- This question paper consists of 13 questions, 20 pages. You are also given an Information Sheet.
- Answer all questions on the Question Paper.
- Read and answer all questions carefully. Write legibly and present your work neatly.
- All necessary working which you have used in determining your answers **must** be clearly shown.
- Approved non-programmable calculators may be used except where otherwise stated. Where necessary give answers correct to 1 decimal place unless otherwise stated.
- Diagrams have not necessarily been drawn to scale.

SECTION A	Q1	Q2	Q3	Q4	Q5	Q6	Q7	
Out of	33	8	4	7	13	4	9	
SECTION B	Q8	Q9	Q10	Q11	Q12	Q13		TOTAL
Out of	19	13	12	13	10	5		150

SECTION A

Question 1

1.1 Solve for x in each of the following. Show all relevant working detail.

a) $x^2 - 1 = x$ (Round off to two decimal places) (4)

b) $2x^2 - x - 6 > 0$ (4)

1.2 Simplify the following without a calculator:

a) $\sqrt{9x^4 + 16x^4}$ (2)

$$\text{b) } \left(\frac{b^{-\frac{1}{3}}}{\sqrt[3]{b^2}} \right)^{-2}$$

(4)

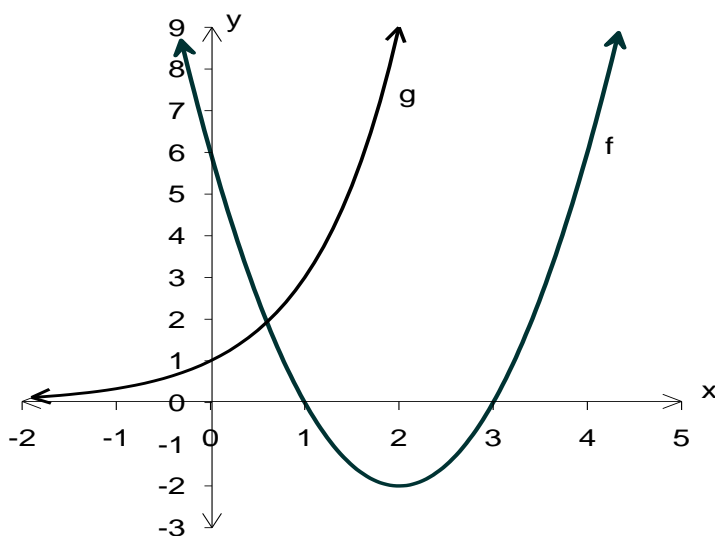
$$\text{c) } \frac{9^{n-1} \cdot 27^{3-2n}}{81^{2-n}}$$

(4)

Question 3

After just 2 years, a tablet is worth one third of its original value. Assuming reducing balance depreciation, what was the annual rate of depreciation?



[4]**Question 4**

- a) Which function, f or g, has the equation $y = a^x$? (1)

b) What is the range of $g(x)$?

(1)

c) Give the equation of the asymptote of $g(x)$.

(1)

d) Give the equation of the axis of symmetry of $f(x)$

(1)

e) For what values of x is $f(x)$ increasing?

(1)

f) For what values of x will $g(x).f(x) < 0$?

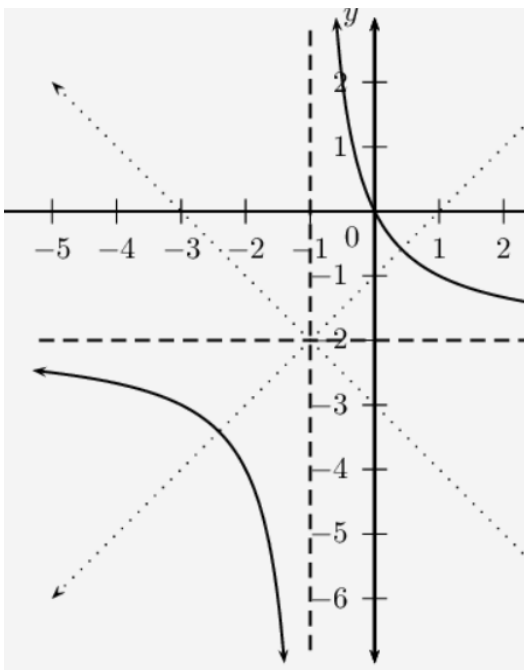
(2)

[7]

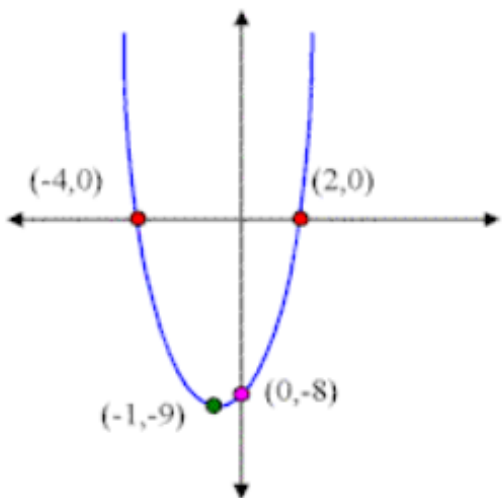
Question 5

Calculate the values of a ; b ; c ; d ; e ; f and g in each of the equations below:

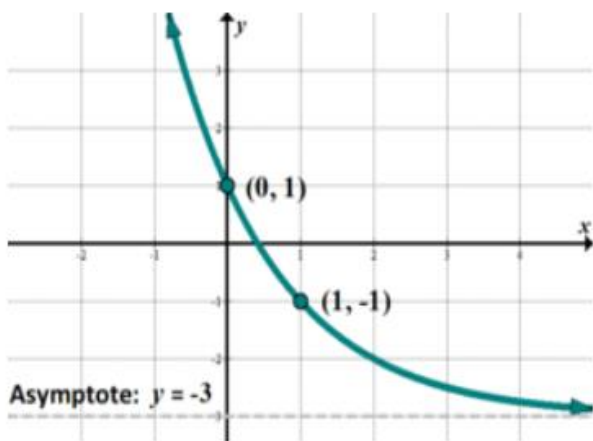
$$y = \frac{a}{x-b} + c \quad (4)$$



$$y = dx^2 + ex + f \tag{5}$$



$$y = g \cdot h^x + i \tag{4}$$



[13]

Question 6

Without solving for x , determine the nature of the roots of the following equation:

$$x^2 - 4x = -3 \tag{4}$$

Question 9

a) Bob runs a small car wash business. He starts saving for new equipment, by investing at 7,5% p.a. compounded quarterly.

i) What effective rate would give him the same return on his investment? (3)

ii) Bob deposits R10 000 immediately.

The interest rate for the first year is 7,5% compounded quarterly.

At the end of the first year, the interest changes to 7,8% compounded monthly.

6 months later, the rate again changes, to 7% compounded monthly and he deposits another R 5000.

What would the investment be worth at the end of the 3rd year? (5)

Question 10

- a) After exams, you settle down in front of the TV to watch a movie. Your Mom puts a plate of biscuits next to you containing 10 biscuits with assorted flavours:

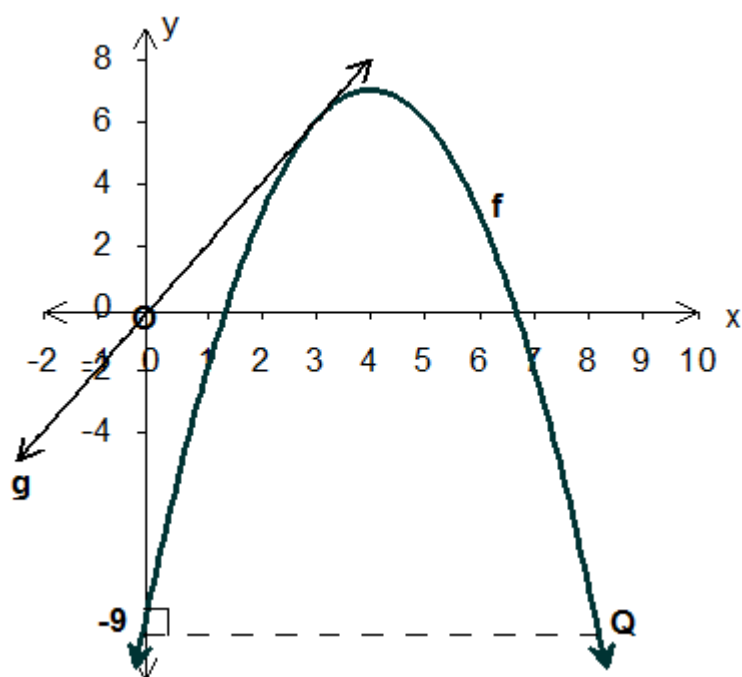


3 peanut butter, 5 chocolate chip and 2 ginger.

You get so engrossed in the movie that you don't look to see what biscuit you are choosing.

- i) **Two biscuits are chosen and eaten**, one after the other.
Draw a tree diagram to represent all the outcomes. (4)

- ii) Having eaten 2 biscuits.
What is the probability that you **have eaten at least 1 chocolate chip biscuit**? (3)

Question 11

$$f(x) = ax^2 + bx + c \text{ and } g(x) = 2x$$

The point (4; 7) is the turning point of the parabola.

- a) Write down the co-ordinates of Q. (2)

- b) Show by calculation that $f(x) = -x^2 + 8x - 9$. (4)

- c) Give the new equation of $h(x)$ in its **simplest form** if $h(x) = f(x + 3)$ and **describe the transformation that occurred.** (3)

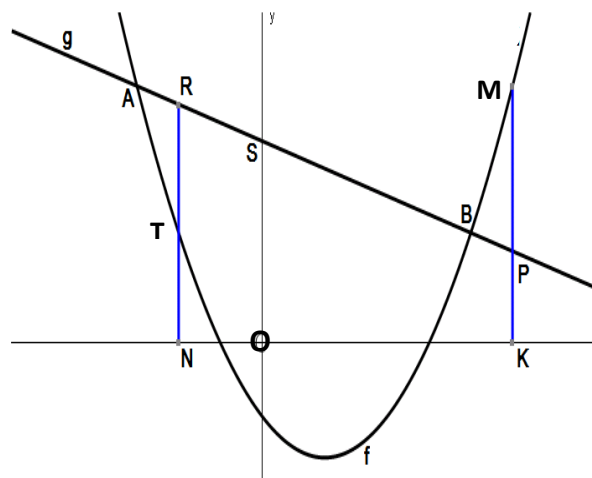
- d) Give the new equation of $t(x)$ if $t(x) = -f(x)$ and describe the transformation that occurred. (2)

- e) If $-x^2 + 8x - 9 = 2x + k$
What must the value of k be so that there are two real roots. (2)

[13]

Question 12

Look at the sketch graph alongside (not according to scale) of the parabola $f(x) = x^2 - 3x - 4$ and straight line $g(x) = -x + 11$. The graphs intersect at A and B.



Determine:

- a) The length of OK if MP is 33 units.

(5)

- b) The maximum length of RT.

(5)

Question 13

Given that $f(x) = \frac{1}{4}x^2 + px - 3$ and the minimum value of $f(x)$ is -12 .

Determine the value(s) of p .

[5]
