

## Term 2- Geography Task 10

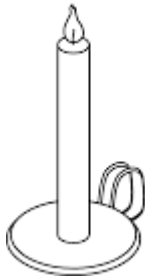
Name: \_\_\_\_\_ Surname: \_\_\_\_\_ Grade 4: \_\_\_\_\_ **Duration: 1hr.**

**Question 1: Complete the sentence by filling in the correct definition from the table below:**

continent	coastline	key	plan view	symbol	side view
-----------	-----------	-----	-----------	--------	-----------

- 1.1 The line where the land meets the sea is known as a \_\_\_\_\_. (1)
- 1.2 A sign or picture that is used in the place of an object is known as a \_\_\_\_\_. (1)
- 1.3 When we look at an object from above it is a \_\_\_\_\_. (1)
- 1.4 A list of symbols with their meanings is a \_\_\_\_\_. (1)
- 1.5 A \_\_\_\_\_ is a very large area of land. (1)

**Question 2: Side view and plan view**



**Object A**





**Object B**

- 2.1 The following objects above are drawn in the \_\_\_\_\_ view. (1)
- 2.2 Draw object A and object B in the Plan view.

Object A	Object B

**Question 3: Grid reference**



- 3.1 Write down the grid reference of the trees: \_\_\_\_\_, \_\_\_\_\_, \_\_\_\_\_ . (3)
- 3.2 Write down the grid reference of the trash can: \_\_\_\_\_ . (1)
- 3.3 Write down the grid reference of the bridge: \_\_\_\_\_ . (1)
- 3.4 What is found at C 3: \_\_\_\_\_ . (1)
- 3.5 What is found at E 5: \_\_\_\_\_ . (1)
- 3.6 What is found at A 2: \_\_\_\_\_ . (1)

**Question 4: Map of South Africa**



4.1 Name two coastal provinces: \_\_\_\_\_ (2)

\_\_\_\_\_

4.2 What is the capital city of: \_\_\_\_\_ (3)

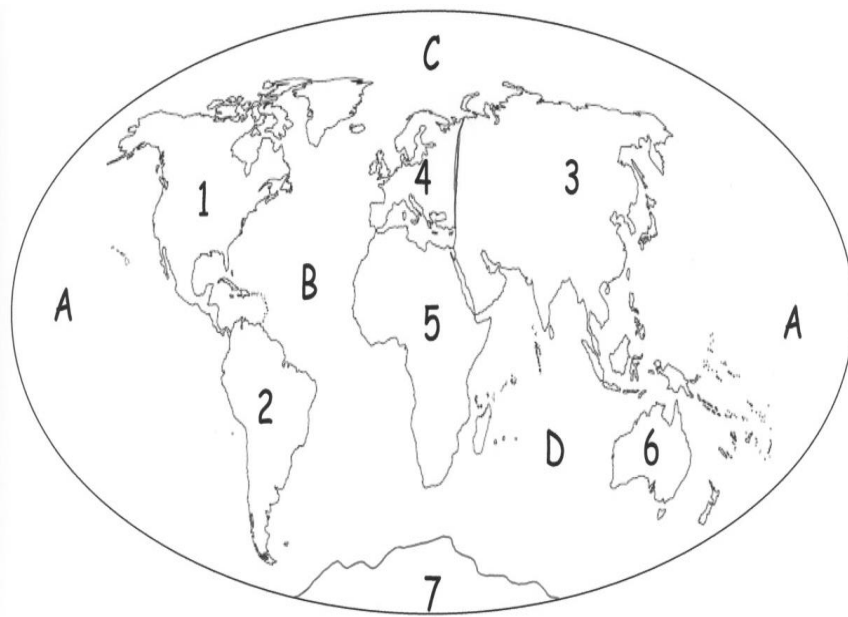
Gauteng - \_\_\_\_\_

Western Cape - \_\_\_\_\_

Kwa Zulu Natal - \_\_\_\_\_

4.3 Which province is to the west of Free State: \_\_\_\_\_ (1)

**Question 5: Map of the world**



5.1 Write down the name of continent 5: \_\_\_\_\_ (1)

5.2 Name ocean D: \_\_\_\_\_ (1)

5.3 Name ocean B: \_\_\_\_\_ (1)

Total: \_\_\_\_\_/25