

# Term 2- Geography Open book Test

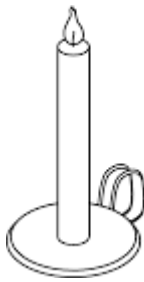
Name: \_\_\_\_\_ Surname: \_\_\_\_\_ Grade 4: \_\_\_\_\_

**Question 1: Complete the sentence by filling in the correct definition from the table below:**

continent	coastline	Key	Plan view	Symbol	Side view
-----------	-----------	-----	-----------	--------	-----------

- 1.1 The line where the land meets the sea is known as a **coastline**. (1)
- 1.2 A sign or picture that is used in the place of an object is known as a **symbol**. (1)
- 1.3 When we look at an object from above it is a **plan view**. (1)
- 1.4 A list of symbols with their meanings is a **key**. (1)
- 1.5 A **continent** is a very large area of land. (1)

**Question 2: Side view and plan view**



**Object A**





**Object B**

- 2.1 The following objects above are drawn in the **side** view. (1)
- 2.2 Draw object A and object B in the Plan view.

Object A	Object B

(2)

**Question 3: Grid reference**



- 3.1 Write down the grid reference of the trees:   **A5**  ,   **A3**  ,   **E4**  . (3)
- 3.2 Write down the grid reference of the trash can:   **D1**  . (1)
- 3.3 Write down the grid reference of the bridge:   **E5**  . (1)
- 3.4 What is found at C 3:   **fountain**   (1)
- 3.5 What is found at E 5:   **bridge**   (1)
- 3.6 What is found at A 2:   **ice-cream**  . (1)

**Question 4: Map of South Africa**



4.1 Name two coastal provinces:

Natal OR Eastern Cape OR Western Cape OR

Northern Cape. (accept any 2) (2)

4.2 What is the capital city of:

(3)

Gauteng - Johannesburg

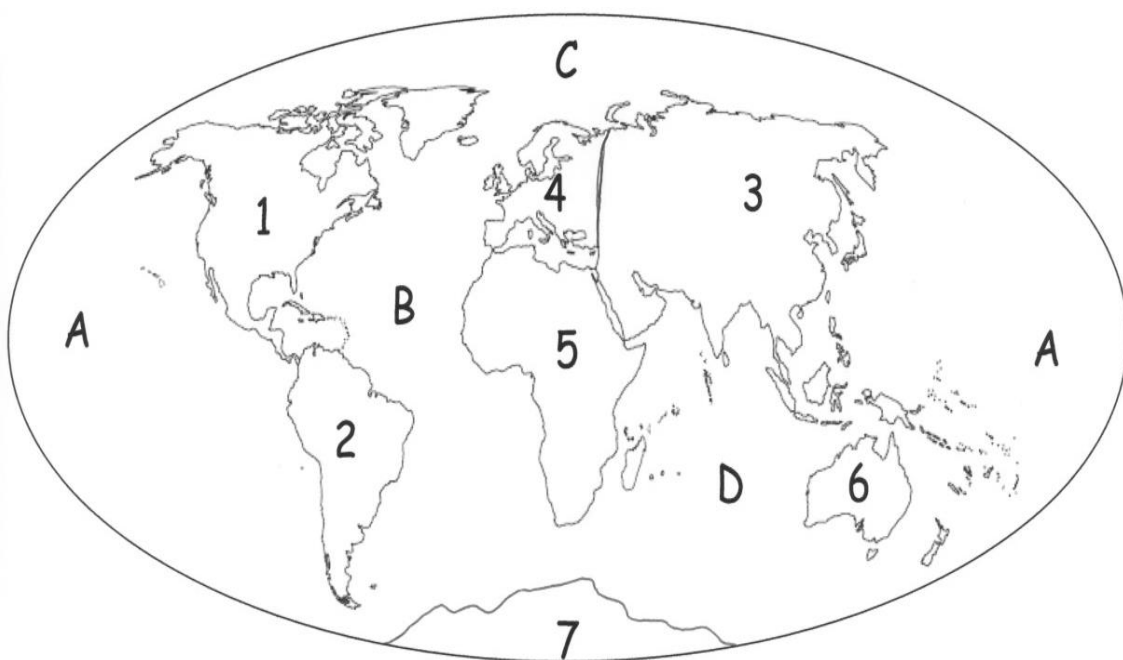
Western Cape - Cape Town

Kwa - Zulu Natal - Pietermaritzburg

4.3 Which province to the west of Free State:

Northern Cape (1)

**Question 5: Map of the World**



5.1 Write down the name of continent 5: Africa.

(1)

5.2 Name ocean D: Indian Ocean.

(1)

5.3 Name ocean B: Atlantic Ocean.

(1)

Total: \_\_\_\_\_/25