























Quality  
learning  
@ home



**GET Term 2 Take Home Package**  
**Social Sciences: Geography**  
**Grade 4**

**This image refers to question: 1**

	1	2	3	4	5
A					
B					
C					
D					

**Question 1: Multiple Choice**

C3 is the grid reference of the ... .

- |   |        |
|---|--------|
| A | bee    |
| B | frog   |
| C | mouse  |
| D | spider |

**This image refers to question: 2**



**Question 2: Text Input**

This is a (...) view of the Ellis Park Rugby Stadium.

This image refers to question: 3, 4



**Question 3: Multiple Choice**

Which of these cities are found in the Northern Cape?

- A** Springbok and De Aar
- B** Upington and Beaufort West
- C** Rustenburg and De Aar
- D** Upington and Welkom

**Question 4: Multiple Choice**

Which of these cities is the closest to Botswana?

- A** Polokwane
- B** Upington
- C** Rustenburg
- D** Mahikeng

This image refers to question: 5



<https://pixabay.com/en/banner-header-continent-country-1158378/>

**Question 5: Please Fill In The Blanks**

The very large areas of land shown on the world map are known as the (1) .

The large masses of water that are seen are known as (2) .

Smaller areas of salt water are known as (3) and smaller areas of land surrounded by water are known as...(4) .

Possible Answers: water masses | islands | towns | seas | continents | oceans

1	
3	

2	
4	

This image refers to question: 6



**Question 6: Please Fill In The Blanks**

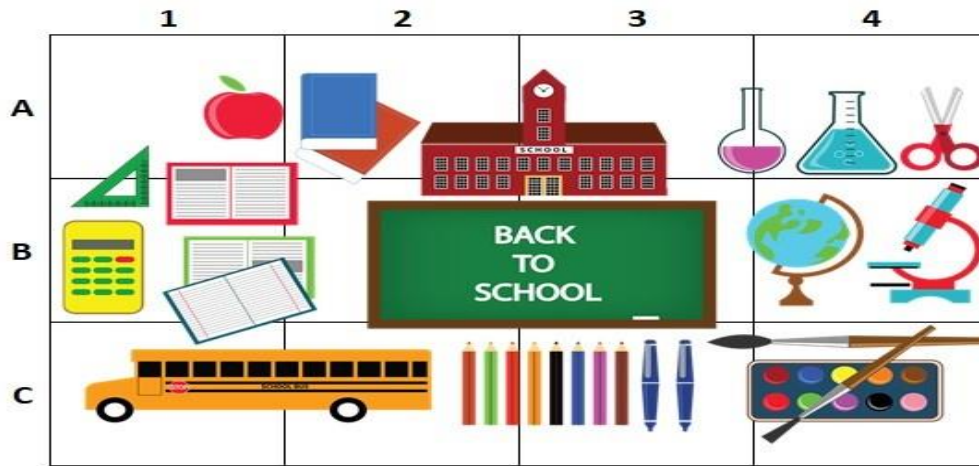
The (1) in this picture is a landmark. This landmark (2).

Possible Answers: is part of nature | lighthouse | signpost | was made by people

1	
---	--

2	
---	--

**This image refers to question: 7, 8**



**Question 7: True/False**

The grid reference of the school bus is C3.

TRUE

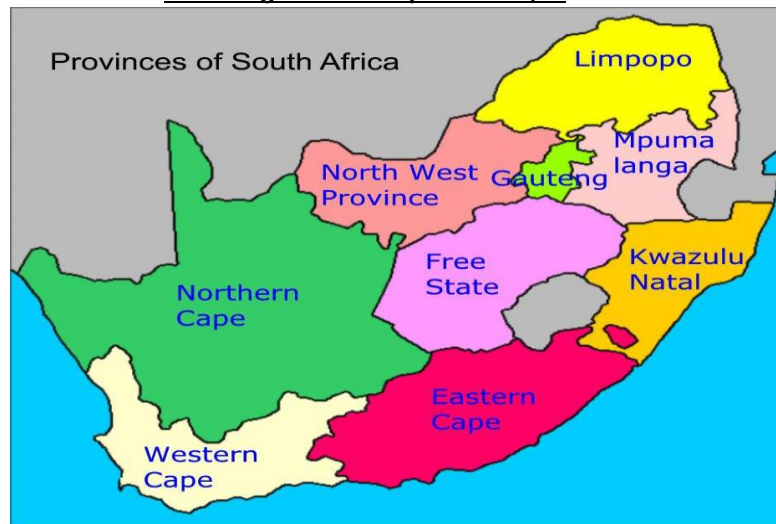
FALSE

**Question 8: Text Input**

The grid reference of the apple is ... .

Give the letter and then the number.

**This image refers to question: 9,10**



**Question 9: Text Input**

The ... Ocean lies off the coast of the Eastern Cape.

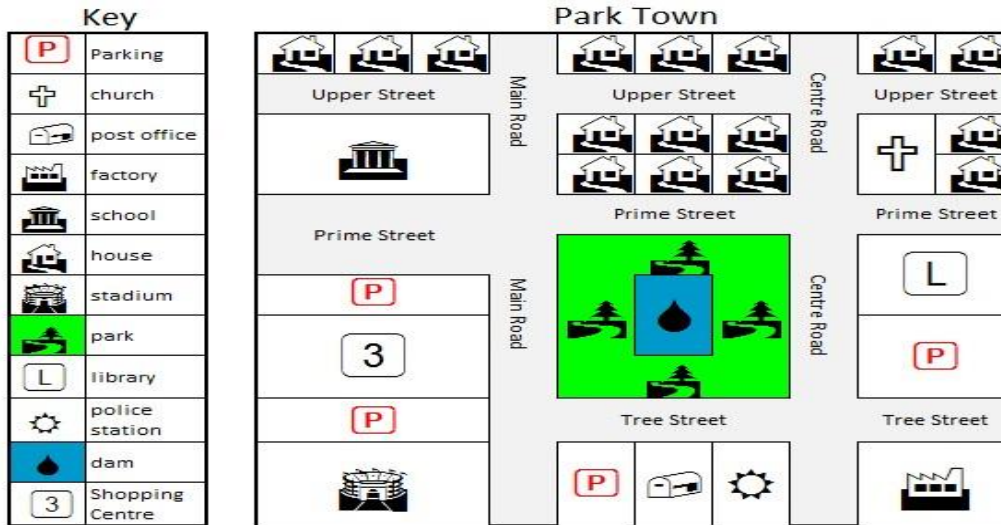
**Question 10: True/False**

There are 8 provinces in South Africa.

TRUE

FALSE

**This image refers to question: 11, 12**



**Question 11: True/False**

Tree Street is the longest street on the map.

TRUE

FALSE

**Question 12: Multiple Choice**

Which street has the most houses?

- A** Upper Street
- B** Prime Street
- C** Tree Street
- D** Main Road

This image refers to question: 13



**Question 13: Multiple Choice**

Amy's mom is looking for their dog on the beach. She is showing her mom that the dog is ... .

- |          |              |
|----------|--------------|
| <b>A</b> | on her left  |
| <b>B</b> | on her right |
| <b>C</b> | ahead        |
| <b>D</b> | behind her   |

This image refers to question: 21



**Question 21: Multiple Choice**

A ... is a round model with a drawing of the world on it.

- |          |        |
|----------|--------|
| <b>A</b> | ball   |
| <b>B</b> | sphere |
| <b>C</b> | world  |
| <b>D</b> | globe  |