





















Subject: Grade 4 Social Sciences (Geography)
Topic: Social Sciences (Geography): Exam Term 2
Total: 87 Marks

Name: _____

Date: _____

This image refers to question: 1

	1	2	3	4	5
A					
B					
C					
D					

Question 1: Multiple Choice

4 marks

C3 is the grid reference of the

- | | |
|----------|--------|
| A | bee |
| B | frog |
| C | mouse |
| D | spider |

This image refers to question: 2



Question 2: Text Input

3 marks

This is a (...) view of the Ellis Park Rugby Stadium.

This image refers to question: 3, 4



Question 3: Multiple Choice

4 marks

Which of these cities are found in the Northern Cape?

- A** Springbok and De Aar
- B** Upington and Beaufort West
- C** Rustenburg and De Aar
- D** Upington and Welkom

Question 4: Multiple Choice

4 marks

Which of these cities is the closest to Botswana?

- A** Polokwane
- B** Upington
- C** Rustenburg
- D** Mahikeng

This image refers to question: 5



<https://pixabay.com/en/banner-header-continent-country-1158378/>

Question 5: Please Fill In The Blanks

8 marks

The very large areas of land shown on the world map are known as the (1) .

The large masses of water that are seen are known as (2) .


Smaller areas of salt water are known as (3) and smaller areas of land surrounded by water are known as (4) .

Possible Answers: water masses | islands | towns | seas | continents | oceans

1	
3	

2	
4	

This image refers to question: 6



<https://za.pinterest.com/pin/295056213056482474/>

Question 6: Text Input

3 marks

A ... is missing from this treasure map. All maps should have one of these.

This image refers to question: 7



Question 7: Please Fill In The Blanks

4 marks

The (1) in this picture is a landmark. This landmark (2).

Possible Answers: is part of nature | lighthouse | signpost | was made by people

1	
----------	--

2	
----------	--

This image refers to question: 8




Question 8: Text Input

3 marks

Would you find this 'basic need', in a **rural** setting or in an **urban** setting?

Type only the word - **rural** or **urban**.

This image refers to question: 9, 10



Question 9: True/False

2 marks

The grid reference of the school bus is C3.

TRUE

FALSE

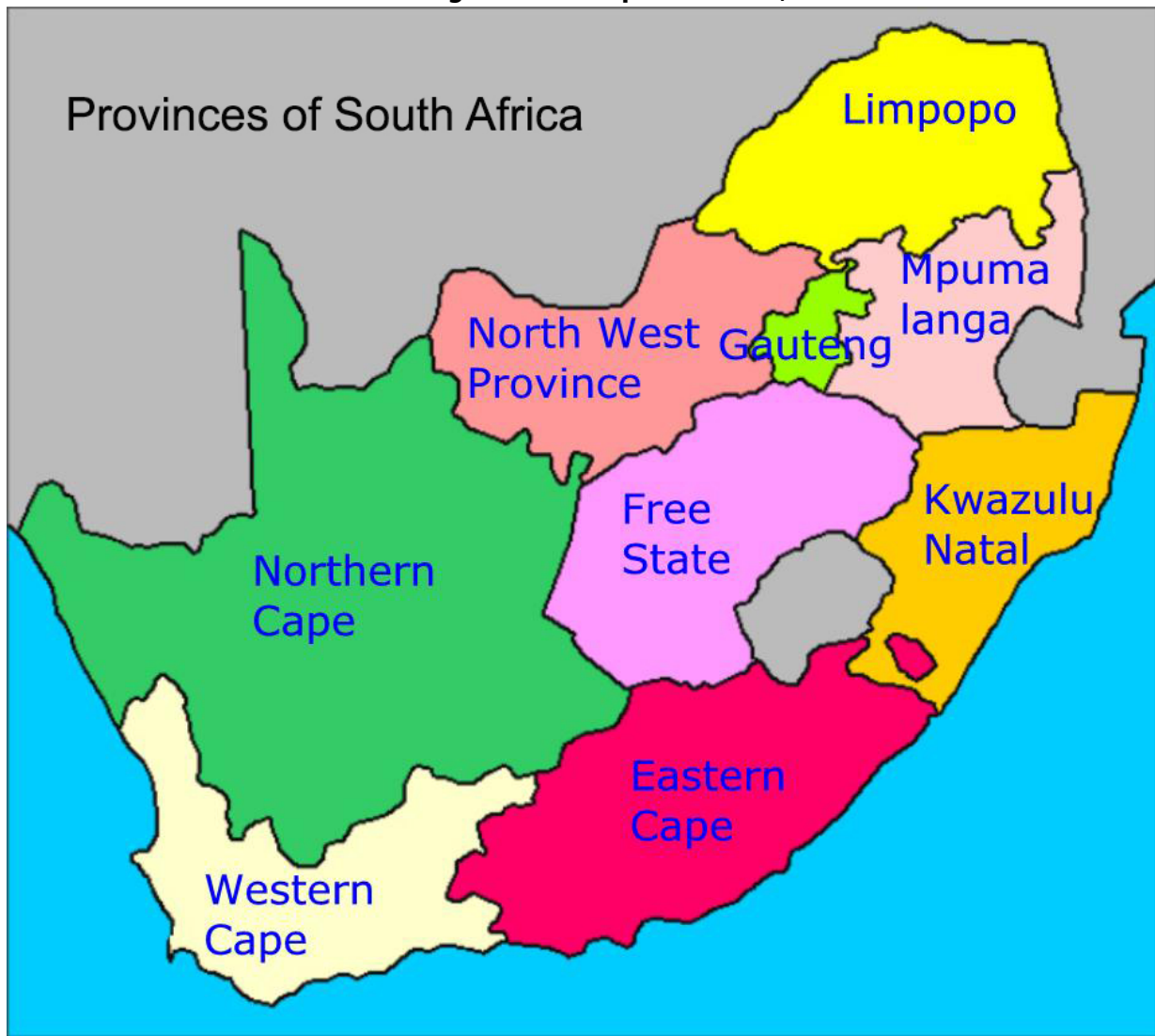
Question 10: Text Input

3 marks

The grid reference of the apple is

Give the letter and then the number.

This image refers to question: 11, 12



Question 11: Text Input

3 marks

The ... Ocean lies off the coast of the Eastern Cape.

Question 12: True/False

2 marks

There are 8 provinces in South Africa.

This image refers to question: 13



Question 13: True/False

2 marks

Stadiums are small buildings used for special matches or sporting events.

TRUE

FALSE

This image refers to question: 14, 15

Key		Park Town		
	Parking			
	church	Upper Street	Upper Street	Upper Street
	post office			
	factory	Prime Street	Prime Street	Prime Street
	school			
	house			
	stadium			
	park			
	library			
	police station			
	dam			
	Shopping Centre			

Question 14: True/False

2 marks

Tree Street is the longest street on the map.

TRUE

FALSE

Question 15: Multiple Choice

4 marks

Which street has the most houses?

- A** Upper Street
- B** Prime Street
- C** Tree Street
- D** Main Road

This image refers to question: 16



<https://pixabay.com/en/cape-town-harbour-beauty-cityscape-1139567/>, September 2014

Question 16: True/False

2 marks

This is an example of a rural area.

TRUE

FALSE

This image refers to question: 17



Question 17: Multiple Choice

4 marks

Amy's mom is looking for their dog on the beach. She is showing her mom that the dog is

- | | |
|----------|----------------|
| A | on her left |
| B | on her right |
| C | straight ahead |
| D | behind her |

This image refers to question: 18

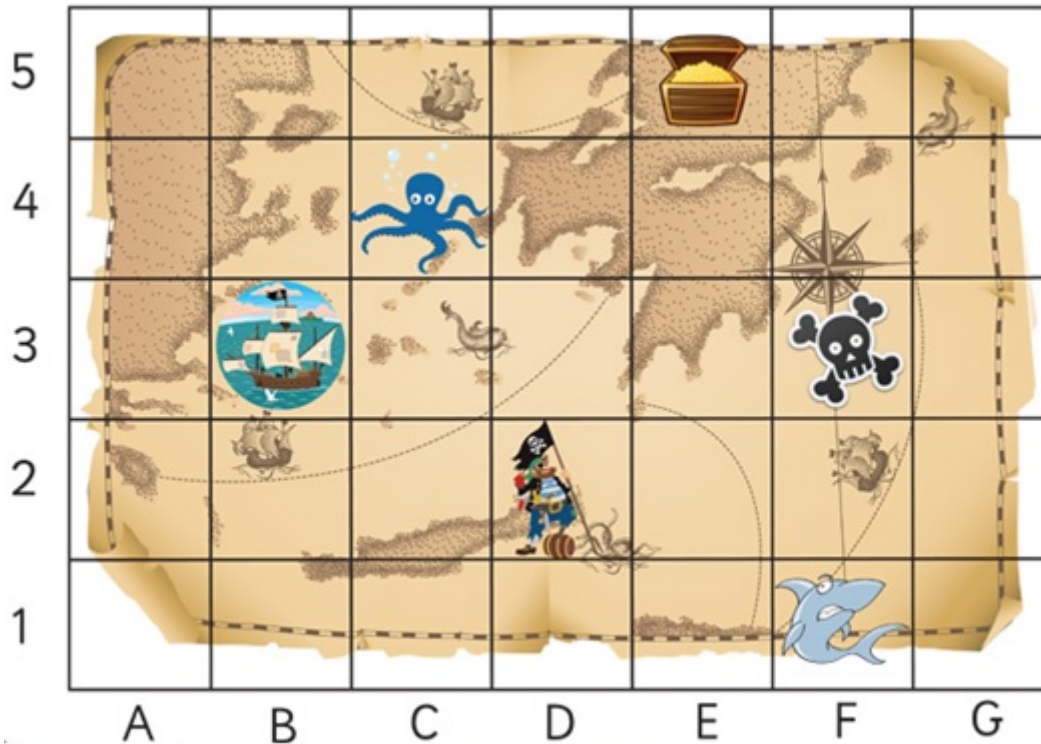


Question 18: Text Input

3 marks

These people are working on a

This image refers to question: 19



<https://www.tes.com/lessons/hxMvLEBcRM88JA/grid-maps>

Question 19: Please Fill In The Blanks

6 marks

There are pirate ships on squares (1) , (2) and (3) .

Make sure to give your answers in alphabetical order.

Possible Answers: B2 | C3 | C5 | F2 | F4 | G5

1	
3	

2	
----------	--

Question 20: Please Fill In The Blanks

6 marks

A clinic is a place or (1) department where patients are given medical (2) or advice, especially of a specialist nature. A clinic is an example of a (3).

Possible Answers: training | treatment | food | hospital | need | want

1	
3	

2	
----------	--

This image refers to question: 21



Question 21: Multiple Choice

4 marks

A ... is a round model with a drawing of the world on it.

- | | |
|----------|--------|
| A | ball |
| B | sphere |
| C | world |
| D | globe |

Question 22: Please Fill In The Blanks

4 marks

Towns and cities are called (1) areas, while farms and villages are in (2) areas.

Possible Answers: rural | urban | orban | rudal

1	<input type="text"/>
----------	----------------------

2	<input type="text"/>
----------	----------------------


Question 23: Text Input

3 marks

On which continent is South Africa found?

<input type="text"/>

This image refers to question: 24



Question 24: True/False

2 marks

This is a side view of a house.

TRUE

FALSE

Question 25: Text Input

2 marks

A small path, that is created by people walking on it, is known as a

Total: 87 Marks